

**OXFORD CAMBRIDGE AND RSA EXAMINATIONS
A LEVEL
H640/03
MATHEMATICS B (MEI)
Pure Mathematics and Comprehension
Insert**

**FRIDAY 15 JUNE 2018: Afternoon
TIME ALLOWED: 2 hours
plus your additional time allowance
MODIFIED ENLARGED 24pt**

INFORMATION FOR CANDIDATES

**This Insert contains the article for
Section B.**

**INSTRUCTION TO EXAMS OFFICER/
INVIGILATOR**

**Do not send this Insert for marking;
it should be retained in the centre or
recycled.**

**Please contact OCR Copyright should you
wish to re-use this document.**



Arithmetic and Geometric Means

Arithmetic and geometric mean of two numbers

For two real numbers a and b , the arithmetic mean of the numbers is defined to be $\frac{a+b}{2}$. For two non-negative real numbers a and b , the geometric mean of the two numbers is defined to be \sqrt{ab} . 5

Squares of real numbers cannot be negative, so we know that $(a-b)^2 \geq 0$. It follows that $a^2 + b^2 \geq 2ab$ and so $(a+b)^2 \geq 4ab$. Hence the arithmetic mean of two real non-negative numbers is greater than, or equal to, their geometric mean. 10

$$\frac{a+b}{2} \geq \sqrt{ab} \text{ for } a, b \geq 0$$

This result is known as the inequality of the arithmetic and geometric means. If the two numbers a and b are equal then the arithmetic mean equals the geometric mean.

The three real numbers $a, \frac{a+b}{2}, b$ form an arithmetic sequence. The three non-negative real numbers a, \sqrt{ab}, b form a geometric sequence. 15

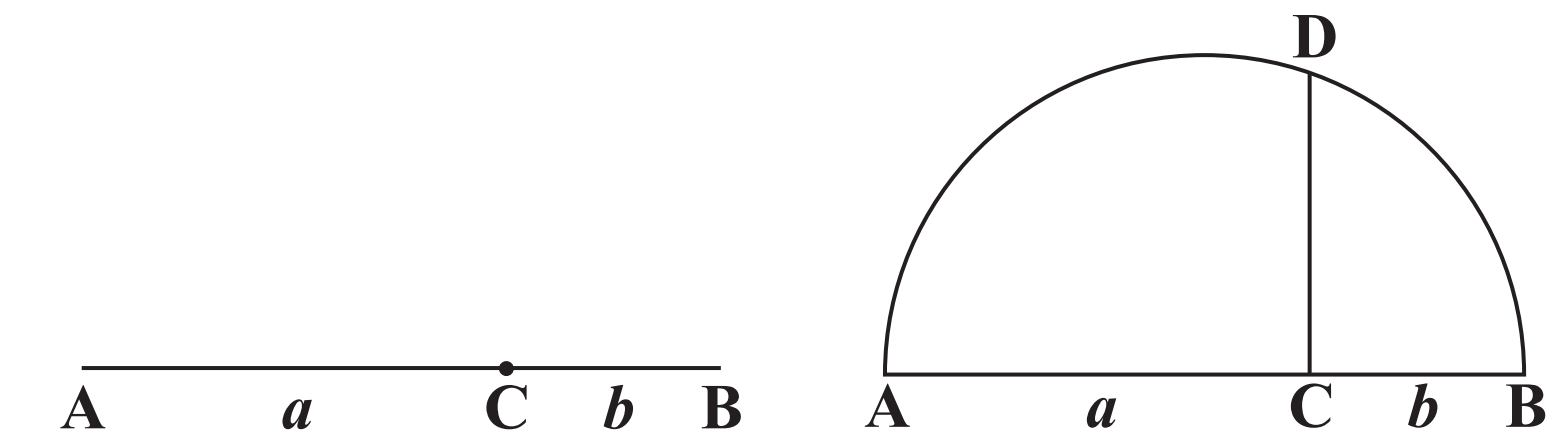
Constructing the arithmetic and geometric mean of two numbers

Lengths representing the arithmetic and geometric mean of two positive numbers can be constructed with a straight edge and compasses. 20

Fig. C1.1 shows a straight line ACB with AC of length a and CB of length b .

Fig. C1.1

Fig. C1.2

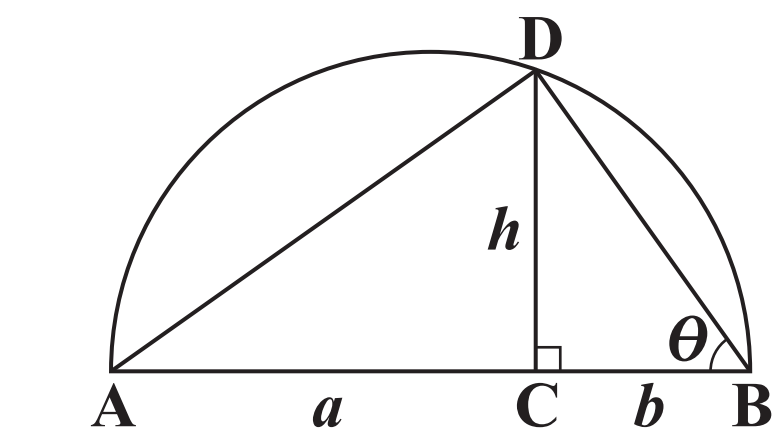


The line AB is first bisected, to locate its midpoint. A semicircle with AB as diameter is then drawn, and a line at C perpendicular to the diameter is constructed. Fig. C1.2 shows this semicircle, with the perpendicular line through C meeting the semicircle at D. 25

The radius of the semicircle is the arithmetic mean of a and b , 30 and the length of CD is the geometric mean of a and b .

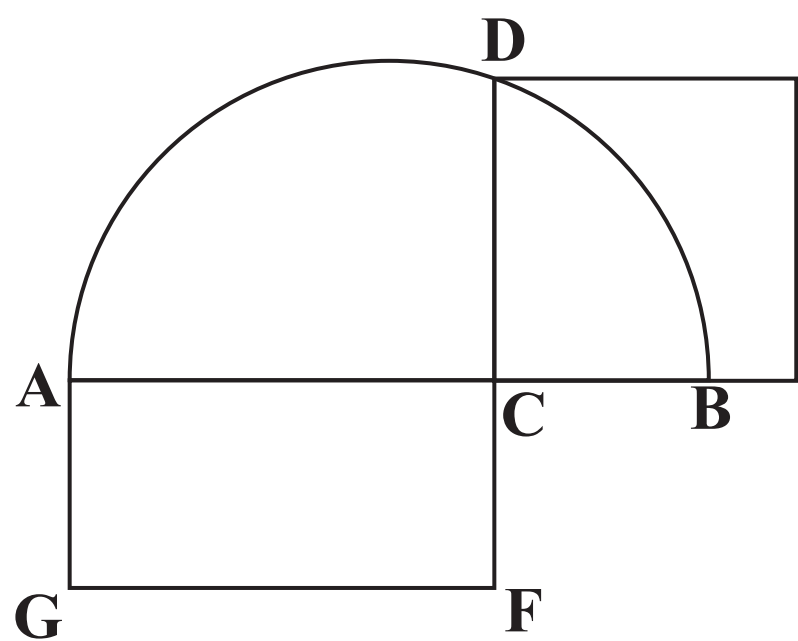
To prove that the length of CD is the geometric mean of a and b , consider triangles ACD and BCD, as shown in Fig. C1.3. Letting angle CBD = θ , it follows that angle CDA is also θ . Finding expressions for $\tan \theta$ in each of triangles ACD and BCD leads to $h = \sqrt{ab}$, where h is the length of CD. 35

Fig. C1.3



The relationship between a , b and h in Fig. C1.3 means that a square with side CD has the same area as a rectangle with sides equal to AC and CB . Fig. C2 shows the square and a rectangle $ACFG$ with CF equal in length to CB . This diagram illustrates how a straight edge and compasses can be used to construct a square with area equal to that of a given rectangle. This method appears in Euclid's books on Geometry (the 'Elements') which were published around 2300 years ago.

Fig. C2



Areas of rectangles

The inequality of arithmetic and geometric means implies that the square has the smallest perimeter of all rectangles with the same area.

Consider a rectangle of given area A that has sides of lengths x and y , so that $xy = A$. The perimeter of this rectangle is $2(x + y)$. From the inequality of arithmetic and geometric means, we know that $\frac{x + y}{2} \geq \sqrt{xy}$ so that $2(x + y) \geq 4\sqrt{xy}$. 50

But the right-hand side of this last inequality has the fixed value $4\sqrt{A}$ whatever x and y are. For a square of area A , 55
each side has length \sqrt{A} and so $4\sqrt{A}$ is the perimeter of this square. Therefore, the perimeter of any rectangle of area A is not less than this, so the square has the smallest perimeter of all rectangles with given area.

Copyright Information

OCR is committed to seeking permission to reproduce all third-party content that it uses in its assessment materials. OCR has attempted to identify and contact all copyright holders whose work is used in this paper. To avoid the issue of disclosure of answer-related information to candidates, all copyright acknowledgements are reproduced in the OCR Copyright Acknowledgements Booklet. This is produced for each series of examinations and is freely available to download from our public website (www.ocr.org.uk) after the live examination series.

If OCR has unwittingly failed to correctly acknowledge or clear any third-party content in this assessment material, OCR will be happy to correct its mistake at the earliest possible opportunity.

For queries or further information please contact the Copyright Team, First Floor, 9 Hills Road, Cambridge CB2 1GE.

OCR is part of the Cambridge Assessment Group; Cambridge Assessment is the brand name of University of Cambridge Local Examinations Syndicate (UCLES), which is itself a department of the University of Cambridge.